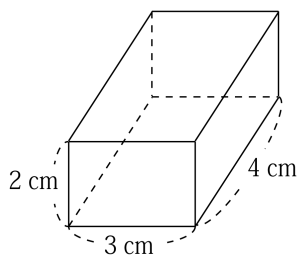
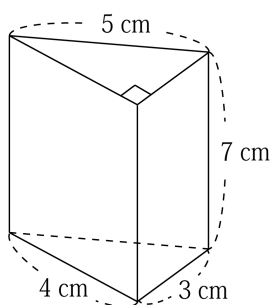


1 次の立体の体積を求めなさい。

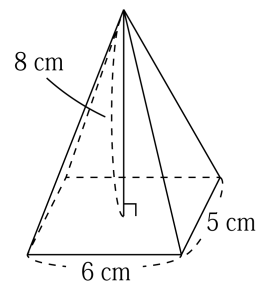
(1)



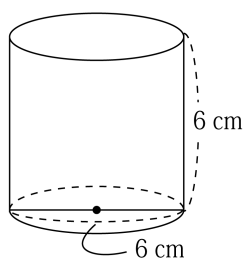
(2)



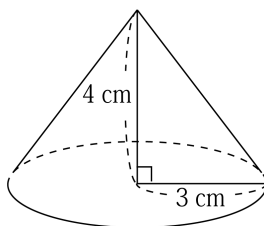
(3)



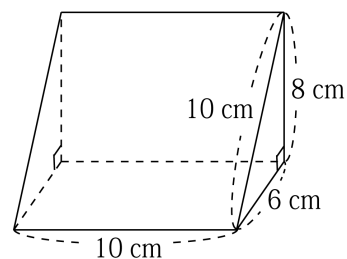
(4)



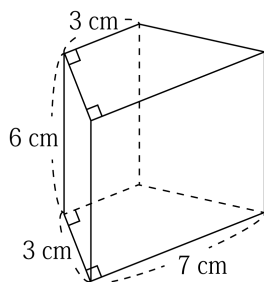
(5)



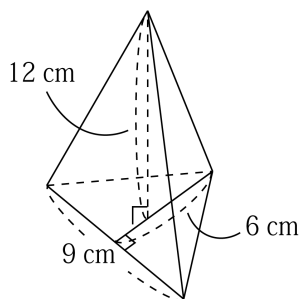
(6)



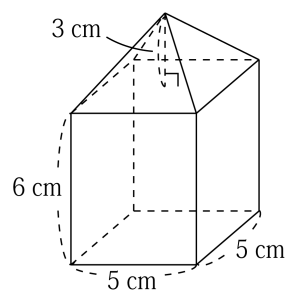
(7)



(8)



(9)



2

次の立体の体積を求めなさい。

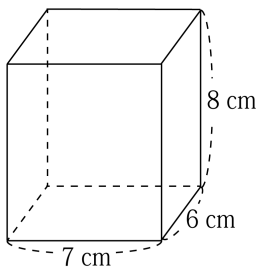
(1) 底面の半径が 3 cm , 高さが 5 cm の円柱

(2) 底面の一辺の長さが 12 cm , 高さが 4 cm の正四角錐

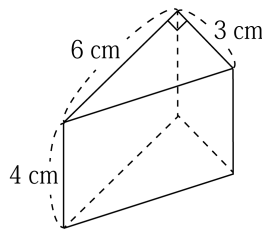
3

次の立体の体積を求めなさい。

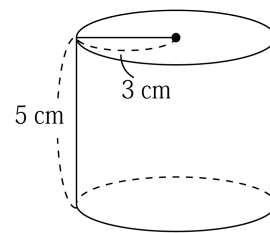
(1)



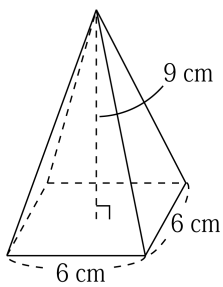
(2)



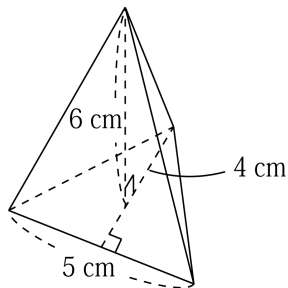
(3)



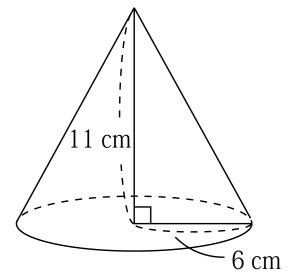
(4)



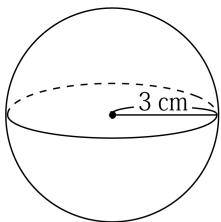
(5)



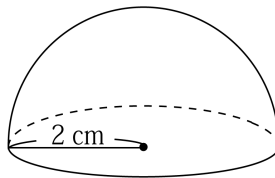
(6)



(7)



(8)



(9)

